



INDIAN SCHOOL AL WADI AL KABIR

DEPARTMENT OF MATHEMATICS (2021-2022)





TOPIC: TIME

WORKSHEET

RESOURCE PERSON: Ms. POONAM NAGABHOOSHAN

NAME: _____ CLASS: III SEC: _____ DATE: _____

1. Write the time in two ways. One has been done for you.

a.		The time is half past 2. It is written as 2:30.
b.		The time is _____. It is written as _____.
c.		The time is _____. It is written as _____.
d.		The time is _____. It is written as _____.

2. Circle the correct answer to complete the sentences.

- A day has **12 / 24** hours.
- There are **60 / 30** minutes in an hour.
- A leap year is mostly divisible by **4 / 5**.
- February has **28 / 29** days in a leap year.
- May / April** has 30 days.

3. Observe the picture of the clock given below and answer the questions that follow.



- a. What time does the clock show? _____
- b. Raj reached home from school 1 hour before the time shown. When did he reach home?

- c. What will be the time 15 minutes past the time shown? _____
- d. Sam goes to play 2 hours after the time shown. He goes to play at _____.

4. Complete the table by writing the time you do the given activity. Use a.m. and p.m. correctly.

1. When do you wake up in the morning?	
2. When do you reach home from school.	
3. When do you eat dinner?	
4. When do you go to sleep at night?	

5. Read the given application based questions and write the correct time in the space provided.

1. Meg left Muscat at 9:00 am. It took her 2 hours 30 minutes to reach Sohar. What time did she reach Sohar?

Ans: _____

2. The train from Mumbai to Pune is running 30 minutes late. The scheduled time for departure was 3:00 pm. What time will be train leave?

Ans: _____

3. The library opens at 9:00 am and closes at 1:00 pm. How many hours is it open?

Ans: _____